

Annual Examination 2015-16

Subject : Maths (E.M.)

Class : IV

Time : 3 hrs

MM : 100

Note : Attempt all questions are compulsory-

(5)

Q.1 Tick the correct answer-

(i) What is the place value of 4 in 874392?

- (a) 4000 (b) 400 (c) 40 (d) 40000

(ii) The next number in the series 3,6,9,12 is

- (a) 15 (b) 18 (c) 21 (d) 24

(iii) An hour has

- (a) 3600 Sec (b) 3000 Sec (c) 300 Sec (d) 2400 Sec

(iv) The month in which the number of days are not fixed is-

- (a) January (b) March (c) February (d) May

(v) 5 Kg is equal to -

- (a) 500 (b) 5000 (c) 50 (d) 5

(vi) The collection of numerical facts is called

- (a) Observation (d) Data (c) Rangs (d) Frequency

(vii) The what is the symbol of a rupee?

- (a) ` (b) \$ (c) * (d) 0

(viii) Which one of the following is an even number?

- (a) 17 (b) 23 (c) 37 (d) 42

(ix) $\frac{1}{3} + \frac{2}{3} = ?$

- (a) $\frac{1}{3}$ (b) $\frac{3}{3}$ (c) $\frac{4}{3}$ (d) $\frac{2}{3}$

- (x) A proper fractions is always.....1
- (a) Less then (b) Greater then
- (c) Cannot he sloved (d) Equal.

Q.2 Write the place of the following-

- (a) Place value of 4 in 8431 is =
- (b) Place value of 6 in 4625 is =
- (c) Place value of 2 in 2464 is =
- (d) Place value of 9 in 1309 is =
- (e) Place value of 4 in 4622 is =

Q.3 Fill in the blanks-

- (i) is the multiply of every number.
- (ii) A hour has minutis.
- (iii) There are sides in a triangle.
- (iv) $42 + 65 = \dots\dots\dots + 65$
- (v) The cup has 250 of milk.

Q.4 Write A.M. or P.M. to make these sentences correct.

()

- (a) Seven O'clock in the morning
- (b) 5.40 in evening
- (c) Vikram takes his lunch at 1:10.
- (d) 11.17 in morning
- (e) 7.21 in morning

Q.5 (A) Multiply the following-

()

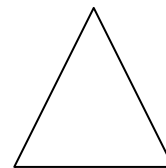
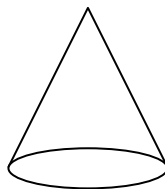
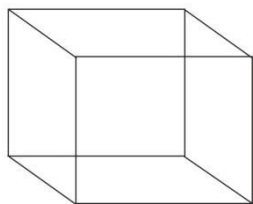
- (a) 843×41 (b) 423×23 (c) 24×64

(B) Divide:-

- (a) $9152 \div 2$ (b) $1626 \div 3$ (c) $462 \div 3$

Q.6 Write all even number which are greater the 50, but less then 62.

Q.7 Write the names of these figures:-



Q.8 (A) Add the following-

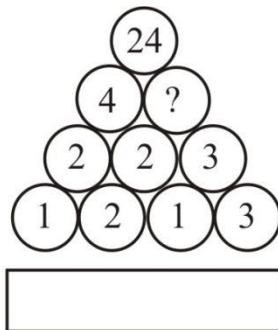
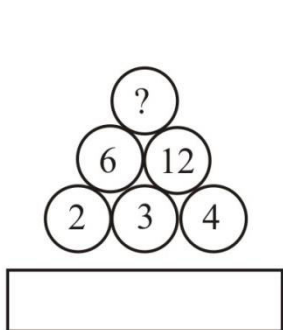
(10)

(a) $1\text{ cm } 6\text{mm} + 15\text{ cm } 4\text{mm} + 20\text{cm } 3\text{mm}$

(b) $\frac{2}{3} + \frac{4}{3}$


(c) $4\frac{2}{7} + 1\frac{2}{7}$

(B) Study the pattern and fill in the circle.



Q.9 What time is shown an the clock:-

(10)



Q.10 Expanded from-

- (a) 2467 =
- (b) 724 =
- (c) 9274 =
- (d) 6743 =
- (e) 7467 =
- (f) 9246 =

Q.11 Word Problem:-

- (i) There are 2569 men, 2554 woman and 1868 children. in a village. Find out the population of the village.
- (ii) In a city there are 294725 men 172569 women and 821050 children. Find the total population of the city.
- (iii) Find the area of each of the following rectangles –
 - (a) Length = 6cm Breadth = 3cm
 - (b) Length = 7cm Breadth = 4cm
- (iv) A box contains 843 oranges. How many oranges are there in 413 such boxes?
- (v) Ashish bought a toy for `60.75 and a pen for ` 13.50. What amount did he spend?
- (vi) Write a table 12,14